



HAPPY SUMMER VACATION

DEAR STUDENTS,

WE HOPE YOU HAVE A WONDERFUL AND ENJOYABLE SUMMER. USE THIS TIME TO EXPLORE NEW HOBBIES, SPEND TIME WITH FAMILY AND FRIENDS, AND ENJOY THE SUNSHINE. REMEMBER, EVERY MOMENT IS AN OPPORTUNITY TO LEARN AND GROW!



प्रकाशमय कल के लिए



SUMMER VACATION HOMEWORK

GRADE – 3

1. Write 75 words on your father with the help of calligraphy (Ref. to Page no. 10).
2. Do a Monochrome newspaper art. Kindly [Click here](#) for your reference.
3. Decoration out cut from chart paper for a soft board. Kindly [click here](#) for your reference.
4. Make a motivational poster by using an A4 sheet. Ref. Example [click here](#).
5. Make a pen stand by waste. Kindly [click here](#) for your reference.

Grade -3 (English)

Summer Holidays Homework

Ques1 Do one page cursive writing daily.

Ques2 Make a chart of 'sentences' Give Ten Examples Of Positive Statements And Ten Examples Of Negative Statements And Ten Examples Of Questions In That.

Ques3 Make a Beautiful Cards For Yourself And Mention The Tasks You Complete Before Leaving The School (For Reference Lavender Book).

Ques4 Try To Solve Page no.

[21,22,23,24,25,26] [Lavender Book]

Ques5 Revise Ch-1,2,3 [Lavender Book] And Ch-1,2 Of Vibrant Grammar [Learning Work]

Happy Holidays !!

Grade 3

General Knowledge

Student Name:

Roll No.

Plants Quiz

Multiple Choice question based on plants:

Tick (✓) the correct choice:

1. Which flower always turns its face towards the sun?
 Marigold Sunflower
2. What kind of root is a carrot?
 Tap root Fibrous root
3. When do plants make their food?
 During day At night
4. What are the stems of big trees called?
 Trunks Tusks
5. Which is the world's biggest flower?
 Rafflesia Cauliflower
6. Which is the world's fastest growing plant on land?
 Cactus Bamboo
7. Which part of a potato plant do we eat?
 Stem Root
8. On which part of a plant stomata are found?
 Roots Leaves
9. What is the outer covering of a seed called?
 Seed coat Shell
10. How many seeds does a mango fruit contain?
 Many One

Do You Know

- **Saffron** is the world's most costly spice. It takes 170,000 flowers to make just 1 kg of saffron!
- Cacti (singular—**cactus**) make their food in stems!

Space Mysteries

Multiple choice question based on space _____:

Tick (✓) the correct option :

- Which is the hottest planet in the Solar System ?
 Mars Venus Mercury
- Which planet is called the 'Red Planet' ?
 Mars Mercury Neptune
- Which planet is called the 'Queen of the Planets' ?
 Saturn Neptune Uranus
- Which is the smallest planet in the Solar System ?
 Mercury Venus Earth
- Which is the biggest planet in the Solar System ?
 Jupiter Uranus Neptune
- What is the sun ?
 A star A planet A satellite
- What is the name of our galaxy ?
 Andromeda Triton Milky Way
- How many planets are there in the Solar System ?
 Four Eight Nine
- Which planet has been excluded from the Solar system ?
 Jupiter Pluto Saturn
- Which planet is called the 'Evening Star' ?
 Saturn Venus Mercury

Do You Know

- Venus is the brightest planet in the sky; it is sometimes visible to the naked eye.
- Mercury takes only 88 days to go around the sun.
- Jupiter is 1300 times bigger than the earth !

Wonderful Facts

Read the following wonderful facts about your body :




Hair grows about **0.5 mm** per day. You lose about 100 hair every day.



An average person will eat more than **50 tonnes** of food in an 80 year lifespan!



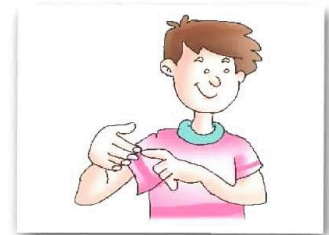
We spend about one-third of our time sleeping. You need **8 hours** of sleep per day.




You blink about **20,000 times** a day! Would you like to count it?



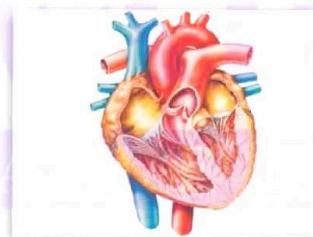
You breathe **13-17 times** a minute when sitting still and up to 80 during exercise !



Your fingernails grow **0.05 cm** a week which is four times faster than your toe nails!



Your sneezes travel at **160 kilometres** per hour – as fast as train!

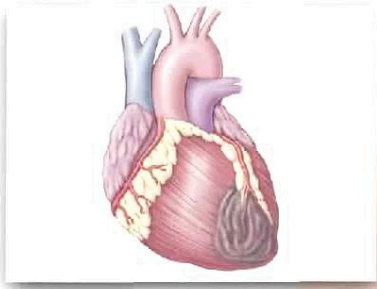


Your heart pumps **13,640 litres** of blood around your body per day.

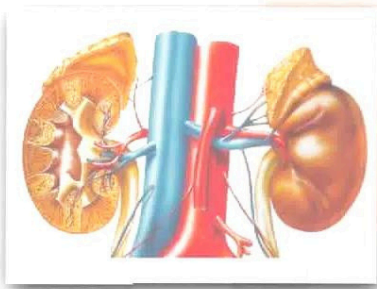
Organs of Human Body

The procedure used for cleaning the blood of a person by separating the waste substance from it is called dialysis.

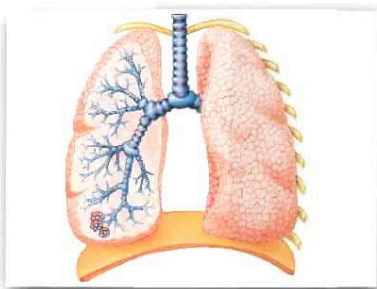
Match the body organs with the correct descriptions :



Heart



Kidneys



Lungs

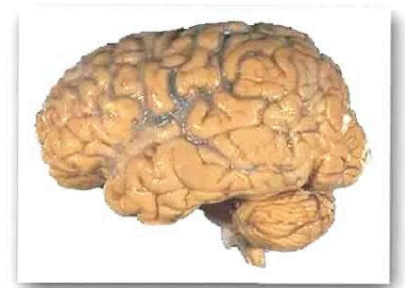
1. These organs are in pair. They filter our blood and make urine.

2. These organs are also in pair. Exchange of gases takes place in these organs.

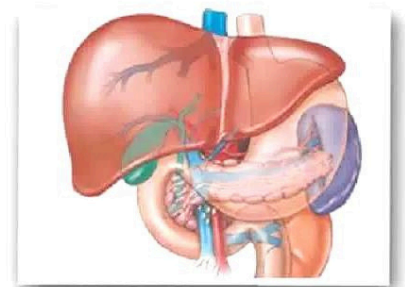
3. This is the largest organ in our body. it does many jobs in our body.

4. This organ pumps blood all around our body.

5. This is the most exciting organ. it enables us to think and take right decisions.



Brain



Liver

Do You Know

- Your intestine makes **two litres** of gas everyday !
- Blood gets its red colour due to presence of **haemoglobin**.
- The job of heart to pump blood around our body.
- The normal blood pressure is 11./75.

Quiz on the Human Body

Tick (✓) the correct option :

- The blood vessels are very
 Thick Thin
- How many lungs do we have ?
 Two Four
- Which part of our body makes sweat ?
 Skin Hair
- The first set of teeth is called the
 Permanent teeth Milk teeth
- Which organs make tear all the time ?
 Ears Eyes
- Another name for your tummy is
 Intestine Stomach
- The nerves start from the
 Heart Brain
- Which organs make urine ?
 Lungs Kidneys
- Which organ controls all activities of the body ?
 Heart Brain
- Our food is digested in the
 Intestine Stomach


Do You Know

- A normal person breathes in **15 times** a minute.
- Nerves carry messages at a speed of **400 kilometres** per second !
- The pulse rate of an adult person while resting is 70 to 72 per minute.

Adventurous Sports

Adventurous sports are **unusual** as well as **dangerous**. Only trained sports men take part in these sports :

Write the names of the following adventurous sports :



1. _____



2. _____



3. _____



4. _____




5. _____



6. _____



7. _____



8. _____



9. _____

Help Box

River rafting	Snow boarding	Windsurfing	Go-karting	Skydiving
Paragliding	Bungee Jumping	Hang gliding	Wake boarding	

Do You Know


- Eric **Weihenmayer** of the USA became the first blind person to climb Mount Everest on May 25, 2001 !

Wonder of India

Indian is called the land of monuments because many monuments are found here.


Tick (✓) the cities in which the following monuments of India are located :

TAJ MAHAL




1. (Agra/Lucknow)

LOTUS TEMPLE




2. (Delhi/Chandigarh)

BULAND DARWAJA



3. (Fatehpur Sikri/Sikandara)

GOL GUMBAJ



4. (Bijapur/Aurangabad)

VICTORIA MEMORIAL




5. (Kolkata/Jaipur)

CHAR MINAR




6. (Hyderabad/Mysore)

HAWA MAHAL



7. (Jaipur/Jodhpur)

MEENAKSHI TEMPLE



8. (Madurai/Chennai)

GATEWAY OF INDIA




9. (Bhopal/Mumbai)

Do You Know

- The Lotus Temple is also called the Bahai Temple.
- Victoria Memorial is made up of White Marble.

Our Great Rulers

Read the clues and write the names of the rulers :



1. She was the queen of Jhansi. She fought against the mighty British army during the Revolt of 1857.

2. He was strong Maratha King. He fought many guerrilla wars against the Mughal Emperor Aurangzeb.



3. He was the last Mughal Emperor. After the Revolt of 1857, he was captured by the British army and was exiled to Burma.

4. He was a great Rajput King. He fought the famous battle of Haldighati



5. He was the greatest of all Mughal Kings. He founded **Din-e-Ilahi**. He was a champion of Hindu-Muslim unity.

6. He fought the famous battle of Kalinga. After the battle he embraced Buddhism.



Help Box

Ashoka

Maharana Pratap

Rani Laxmi Bai


Akbar

Bahadur Shah Zafar


Chatrapati Shivaji

Festivals of India


Look at the pictures of some festivals of India. Write the names of the state where they are celebrated :



1. _____



2. _____



3. _____




4. _____



5. _____



6. _____



7. _____



8. _____

Help Box

Rajasthan	Bihar
Tamilnadu	Orissa
West Bengal	Kerala
Maharashtra	Punjab

Do You Know

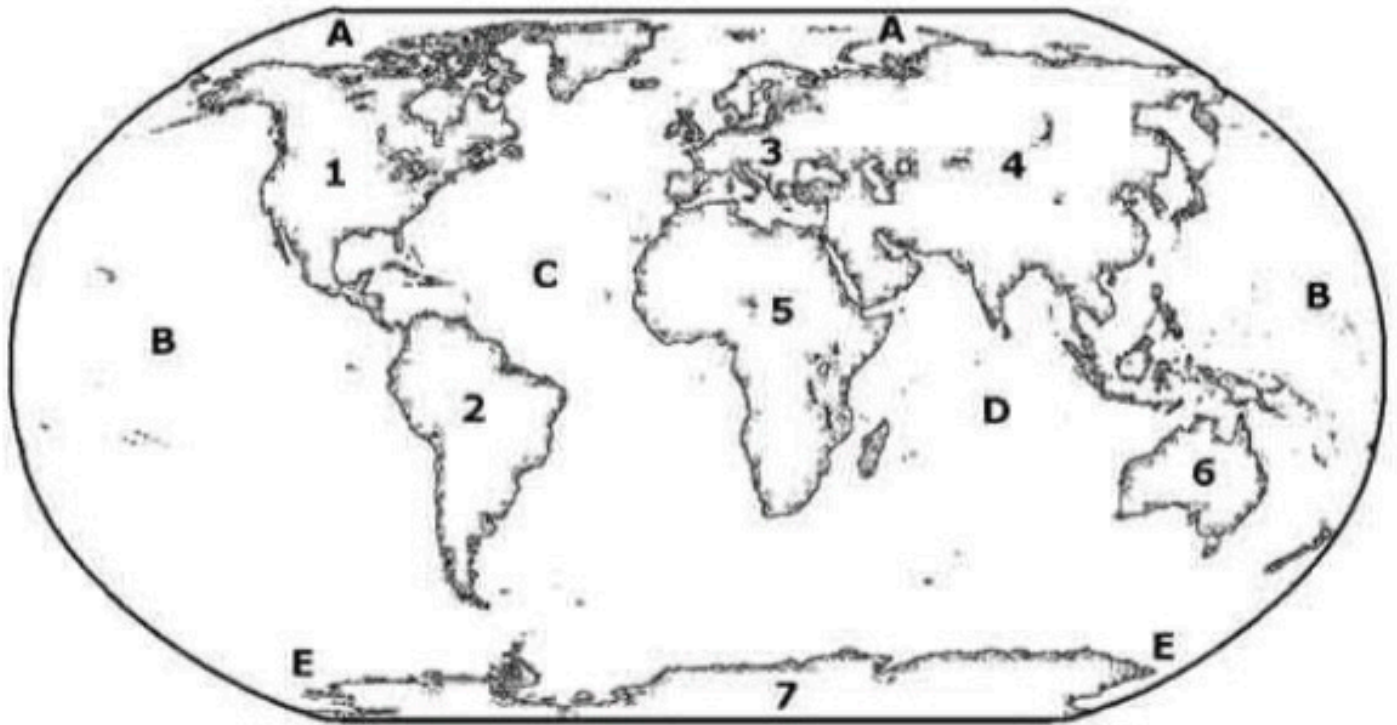
- Snake-boat races on Onam are the single biggest sports event in the world.
- We celebrate Children's Day on **14th November**, while in Japan it is celebrated on **5th May** !

Note: Complete the activity on page no 8 (Snakes and Ladders), 74 (The Energy Saver) in GK book.

~~~~~ Happy Holidays ~~~~~



## Map of the World



Continents:

1. \_\_\_\_\_
2. \_\_\_\_\_
3. \_\_\_\_\_
4. \_\_\_\_\_
5. \_\_\_\_\_
6. \_\_\_\_\_
7. \_\_\_\_\_

Oceans:

- A. \_\_\_\_\_
- B. \_\_\_\_\_
- C. \_\_\_\_\_
- D. \_\_\_\_\_
- E. \_\_\_\_\_

1. Fill in the blanks.

- a. A \_\_\_\_\_ is a large heavenly body that revolves around a star.
- b. \_\_\_\_\_ is the natural satellite of the Earth.
- c. The innermost layer of the Earth is called the \_\_\_\_\_

2. Select the correct answer.

A. Which of the following is the causes of seasons on the Earth?

- a. Rotation of the Earth      b. Revolution of the Earth
- c. Earth's tilted axis          d. Both (a) and (c)

B. Which planet is called the morning star?

- a. Mercury    b. Mars    c. Venus    d. Jupiter

C. The following has maximum numbers of moons.

- a. Saturn    b. Neptune    c. Uranus    d. Jupiter

3. Identify.

a. The blue planet of our solar system.



b. The red planet of our solar system



c. The hottest planet of our solar system





## ACTIVITIES:

1. Make a chart on different types of landforms found on earth.

Or

Make a chart of Solar system.

2. Make a wall hanging with waste material of moon and stars.

Or

Make a globe with waste material.

# Grade -3

# Computer

- Make a list of input, process and output (With picture pasted or drawn) you see at your home. (see example on page 10) on A4 sheet.
- Make a colourful structure of the CPU on the A4 sheet. (Page 20)
- learn chapter 1 (Computer) and chapter 2 (Computer devices)
- learn and use April and May month topics in the Japanese language.

## कक्षा – तीसरी

- **पाठ्यपुस्तक**

- 1) पाठ 4, 5 व 6 के शब्दार्थ और प्रश्न – उत्तर याद करें ।
- 2) रोज़ पुस्तक का एक पेज पढ़ें ।
- 3) रोज़ एक पेज सुलेख लिखें ।

- **व्याकरण**

- 4) वर्णमाला का चार्ट तैयार करें । (अनुक्रमांक 1 से 7)
- 5) मात्राओं का चार्ट तैयार करें । (अनुक्रमांक 8 से 14)
- 6) क्रियात्मक गतिविधि पूरी करें ।

पेज नम्बर -21, 35, 47 (पाठ्यपुस्तक में )

# **Grade - 3**

## **MATHS**

- 1. Do Exercise-2,3,5,6,10,15,18 in holiday's homework notebook.**
- 2. Do page no. 30,31,32,50 in Maths book.**
- 3. Do the given worksheets.**
- 4. Learn and write table 2 to 15.**

### **Activity:**

- 1. Draw Roman Numerals Chart(1-30) [Roll No. 1 to 4]**
- 2. Write successor and predecessor of 20 numbers on a chart.[Roll No. 5 to 9]**
- 3. Draw a clock on cardboard.[Roll No. 10 to 14]**